

Year 3 Maths Activity Mat

Section 1

Partition 314:

$$\boxed{} + \boxed{} + \boxed{}$$

Partition:

$$600 + \boxed{} + \boxed{} = 639$$

Section 2

What other fraction is $\frac{1}{2}$ equal to?

What is $\frac{1}{10}$ of 200?

Section 7

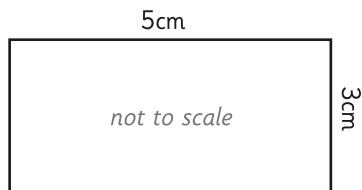
Ella bought a pair of sunglasses priced at £10.20. She paid with a £20 note.

How much change will she have?



Section 3

What is the perimeter of this rectangle?



Section 4

A postman had 155 letters in his bag.

He delivered 26.

How many letters were left?



	H	T	O
-			

Section 8

I'm thinking of a number between 250 and 300.

It is odd.

The ones number is a 3.

Write down 4 possible numbers it could be.

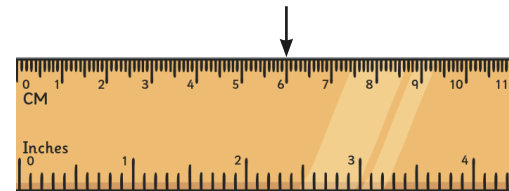
Section 5

How many pennies are there in £4.23?



Section 6

How many cm is the arrow pointing to? What will this be in mm?


 cm

 mm

Year 3 Maths Activity Mat: 2

Answers

Section 1

Partition 314:

$$\boxed{300} + \boxed{10} + \boxed{4}$$

Partition:

$$600 + \boxed{30} + \boxed{9} = 639$$

Section 2

What other fraction is $\frac{1}{2}$ equal to?

$$\boxed{\frac{2}{4}}$$

What is $\frac{1}{10}$ of 200?

$$\boxed{20}$$

Section 7

Ella bought a pair of sunglasses priced at £10.20. She paid with a £20 note.

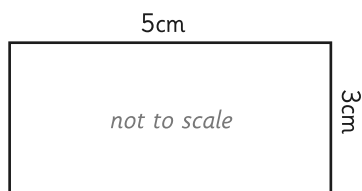
How much change will she have?



$$\boxed{£9.80}$$

Section 3

What is the perimeter of this rectangle?



$$\boxed{16\text{cm}}$$

Section 4

A postman had 155 letters in his bag.

He delivered 26.

How many letters were left?



	H	T	O
	1	5	5
-		2	6
	1	2	9

Section 8

I'm thinking of a number between 250 and 300.

It is odd.

The ones number is a 3.

Write down 4 possible numbers it could be.

Accept any reasonable answer.

Section 5

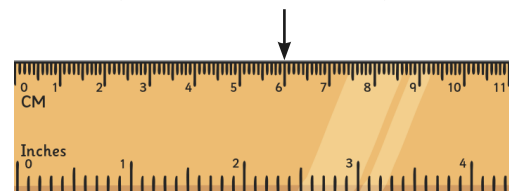
How many pennies are there in £4.23?



$$\boxed{423\text{p}}$$

Section 6

How many cm is the arrow pointing to? What will this be in mm?



$$\boxed{6\text{cm}}$$

$$\boxed{60\text{mm}}$$